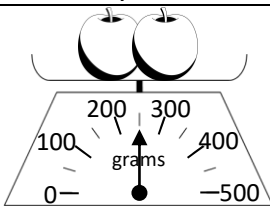
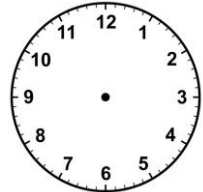
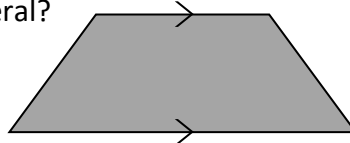
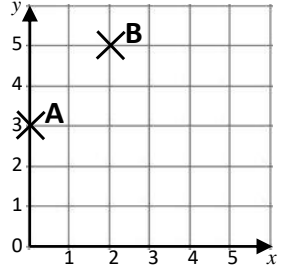


Name: \_\_\_\_\_

Date: \_\_\_\_\_

Class/Group: \_\_\_\_\_

A: Place Value, Add and Subtract		B: Multiply, Divide and Fractions		C: Measure and Geometry	
1. What is the missing number? 50 <input type="text"/> 100 125 150	4:1	11. $72 \div 12 =$	4:9	21. Two apples are weighed. How much does 1 apple weigh?	4:21
2. What is the missing number? 54 63 72 <input type="text"/> 90	4:1	12. Use $2 \times 4 \times 12 = 96$ to answer: $24 \times 4$	4:10		
3. What is 1,000 <b>less</b> than 4920?	4:2	13. $83 \times 7 =$	4:11	22. Draw the hands to show: <div>17:50</div>	4:22
4. Round this number to the nearest 1,000: 1,543	4:2	14. Shop A sells 6 pens for £3. Shop B sells 2 pens for 90p. Which is cheaper?	4:12		
5. Put these numbers in order, smallest first: 3 -2 0	4:3	15. $\frac{1}{2} = \frac{\text{ }}{4} = \frac{4}{\text{ }}$	4:13	23. What is the name of this quadrilateral?	4:23
6. Put these in order, smallest first: 3,293 1,273 2,837	4:4	16. I have $\frac{1}{10}$ of a cake. How many pieces do I cut it into to make $\frac{1}{100}$ ?	4:14		
7. What number does this Roman Numeral represent? <b>XIV</b>	4:5	17. $\frac{11}{4} - \frac{9}{4}$	4:15	24. Plot the point (3, 0). Label it C.	4:28
8. $3,473 + 1,230 =$	4:6	18. Write $\frac{1}{100}$ as a decimal number.	4:16		
9. Write the sum to check $239 - 154 = 85$ : $85 + \text{ } = \text{ }$	4:7	19. What is the <b>value</b> of the 2 in: 1.72	4:17	25. Points A, B and C form 3 corners of a rectangle. Plot the fourth corner of the rectangle and label it D.	4:28
10. A 38cm tall plant grows 16cm a year. How tall will it be after 2 years?	4:8	20. Round 7.8 to the nearest whole number.	4:18		
Total (A)		Total (B)		Total (C)	
Test Total (A+B+C)		R (0-9)	Y (10-19)	G (20-25)	

Name: \_\_\_\_\_

$$\begin{array}{r} 1 \overline{) 353} \\ \phantom{00} \end{array}$$

$$\begin{array}{r} 4 \overline{) 236} \\ \phantom{00} \end{array}$$

$$\begin{array}{r} 9 \overline{) 540} \\ \phantom{00} \end{array}$$

$$\begin{array}{r} 4 \overline{) 345} \\ \phantom{00} \end{array}$$

$$\begin{array}{r} 6 \overline{) 658} \\ \phantom{00} \end{array}$$

$$\begin{array}{r} 1 \overline{) 228} \\ \phantom{00} \end{array}$$

$$\begin{array}{r} 9 \overline{) 417} \\ \phantom{00} \end{array}$$

$$\begin{array}{r} 3 \overline{) 497} \\ \phantom{00} \end{array}$$

$$\begin{array}{r} 2 \overline{) 803} \\ \phantom{00} \end{array}$$

$$\begin{array}{r} 2 \overline{) 409} \\ \phantom{00} \end{array}$$

$$\begin{array}{r} 2 \overline{) 556} \\ \phantom{00} \end{array}$$

$$\begin{array}{r} 5 \overline{) 990} \\ \phantom{00} \end{array}$$

$$\begin{array}{r} 5 \overline{) 427} \\ \phantom{00} \end{array}$$

$$\begin{array}{r} 3 \overline{) 852} \\ \phantom{00} \end{array}$$

$$\begin{array}{r} 7 \overline{) 820} \\ \phantom{00} \end{array}$$

$$\begin{array}{r} 7 \overline{) 359} \\ \phantom{00} \end{array}$$

Name: \_\_\_\_\_

Class: \_\_\_\_\_

Date: \_\_\_\_\_

1. Underline the <b>prefix</b> which means 'before'.			2. Underline the <b>suffix</b> which, when added, forms a noun.		
<i>sub</i>	<i>pre</i>	<i>anti</i>	<i>dry</i>	<i>er</i>	<i>ing</i>
3. Underline the correct <b>homophone</b> to use in this sentence.			4. Underline the correct <b>homophone</b> to use in this sentence.		
<i>Don't ( stair / stare ) at the lady.</i>			<i>Shall I ( pour / poor ) the milk?</i>		
5. Underline the word with the correct spelling.			6. Underline the word with the correct spelling.		
<i>optitian</i>	<i>optician</i>	<i>optishun</i>	<i>expreshun</i>	<i>exprecian</i>	<i>expression</i>
7-8. Number these words to show their <b>alphabetical order</b> .					
<i>sharp</i>		<i>sheep</i>		<i>shift</i>	<i>short</i>

9. Underline the words which have a similar meaning to the word in bold (synonyms).				
<b>sleep</b>	doze	laugh	snooze	nap
10. Underline the <b>noun phrases</b> in the sentence below.			11. Circle the <b>preposition</b> in the sentence below.	
The small, timid dog lay in his basket.				

12-13. Underline two <b>connectives</b> that can be used to signal <b>time</b> and <b>sequence</b> , (or are synonymous with the word 'then').				
<i>unless</i>	<i>next day</i>	<i>clearly</i>	<i>during</i>	<i>because</i>
14-15. Underline the <b>proper nouns</b> or <b>pronouns</b> in this sentence to <b>avoid repetition</b> .				
<i>( Ben / He ) grabbed ( Ben's / his ) packed lunch and ( Ben / he ) ran for the bus.</i>				
16-17. Underline two <b>fronted adverbials</b> that might help signal <b>surprise</b> and <b>suspense</b> .				
<i>One example,</i>	<i>That very moment,</i>	<i>Equally,</i>	<i>Unexpectedly,</i>	
18. Underline the correct word to complete the sentence.		19. Underline the correct word to complete the sentence.		
<i>He has ( drawn / drew ) a lovely picture.</i>		<i>You should have ( came / come ).</i>		

20-21. Underline the <b>fronted adverbial</b> . Punctuate this sentence using <b>commas</b> .	
<i>The following day the eggs began to hatch.</i>	
22-23. Punctuate the sentences using the <b>apostrophe</b> ( ' ) to show <b>singular</b> or <b>plural possession</b> .	
<i>Have you seen the h e n s egg?</i>	<i>Have you seen those h e n s eggs?</i>
24-25. Punctuate these sentences using <b>inverted commas</b> ( " " ), <b>commas</b> ( , , ) and any other punctuation needed..	
<i>What is that Sita asked</i>	<i>My lunch said Ben do you want some</i>

<b>Total:</b>		Red (0 – 9)	Yellow (10 – 19)	Green (20 – 25)
---------------	--	-------------	------------------	-----------------